



# Why Did King Kong Play with the Flying Saucer?



Complete each table. (Round each answer to the nearest whole number, if necessary.) Write the letter for each answer in the circle at the bottom of the page that contains the answer. Construct a circle graph for each set of data.


Instruments in the *Arithmics* Rock Band

Family of Instruments	Number of Players	Percent of total	Central angle
Brass	7	(H)	(T)
Woodwind	4	(E)	(G)
Strings	5	(A)	(O)
Percussion	3	(S)	(E)
Keyboard	1	(T)	(I)
TOTAL	20	100%	360°



Clubs at Jaws Junior High

Club	Number of Members	Percent of total	Central angle
Drama	22	(A)	(H)
Crafts	27	(U)	(S)
Computer	16	(E)	(I)
Magic	10	(F)	(T)
Games	15	(H)	(B)
TOTAL		(W)	(R)



86°	54°	22%	40°	35%	90°	30%	72°	17%	5%	80°	65°	126°
100%	25%	108°	13%	24%	46°	11%	360°	18°	15%	61°	20%	18%