

Mixed Numbers & Improper Fractions

MN 1

Instructions: In each problem below, an improper fraction is represented by blocks beneath a number line. Use the number line to determine what the equivalent mixed number form would be.

(Notice that some number lines have different sub-divisions: thirds, fourths, fifths...)

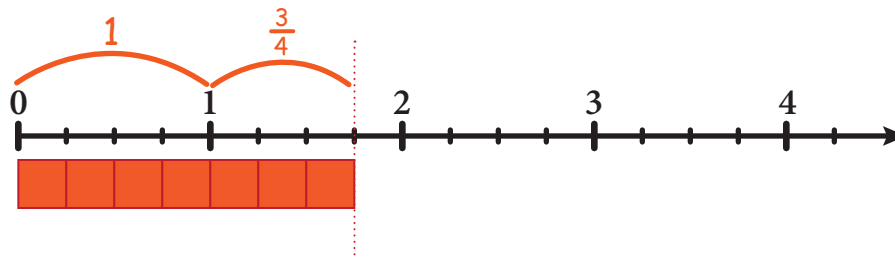
1

Mixed Number

$$1\frac{3}{4}$$

Improper Fraction

$$\frac{7}{4}$$



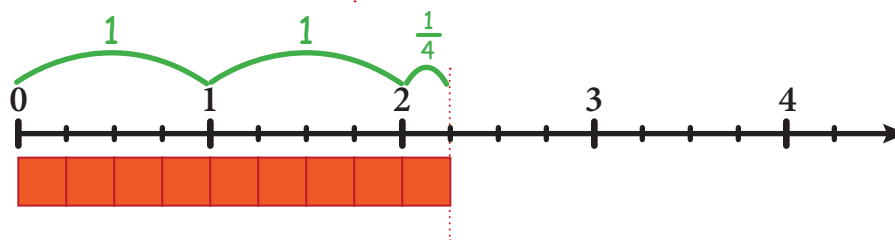
2

Mixed Number

$$2\frac{1}{4}$$

Improper Fraction

$$\frac{9}{4}$$



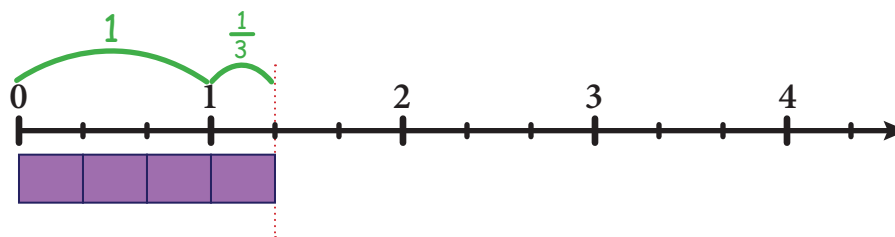
3

Mixed Number

$$1\frac{1}{3}$$

Improper Fraction

$$\frac{4}{3}$$



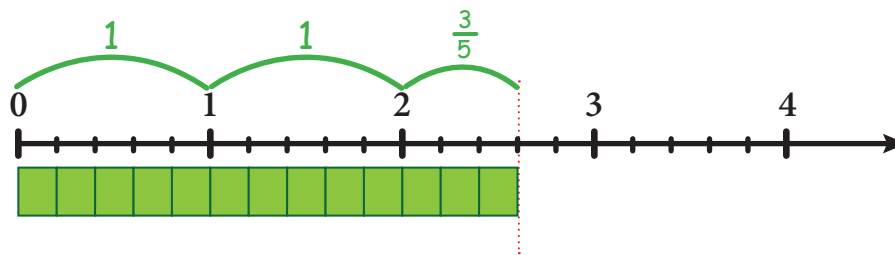
4

Mixed Number

$$2\frac{3}{5}$$

Improper Fraction

$$\frac{13}{5}$$



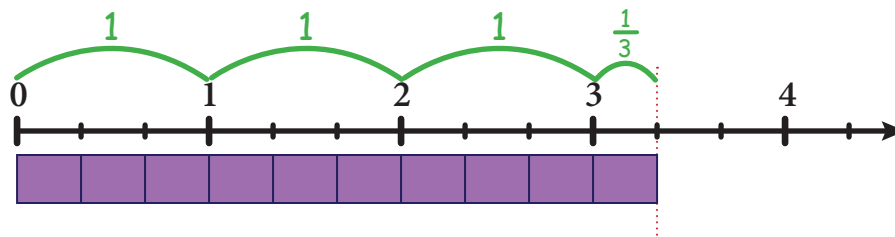
5

Mixed Number

$$3\frac{1}{3}$$

Improper Fraction

$$\frac{10}{3}$$



6

Mixed Number

$$3\frac{2}{4}$$

Improper Fraction

$$\frac{14}{4}$$

