

## Mixed Numbers & Improper Fractions

MN 1

**Instructions:** In each problem below, an improper fraction is represented by blocks beneath a number line. Use the number line to determine what the equivalent mixed number form would be.

(Notice that some number lines have different sub-divisions: thirds, fourths, fifths...)

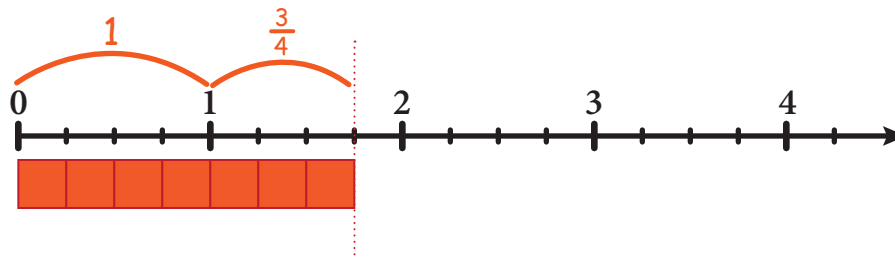
1

Mixed Number

$1\frac{3}{4}$

Improper Fraction

$\frac{7}{4}$

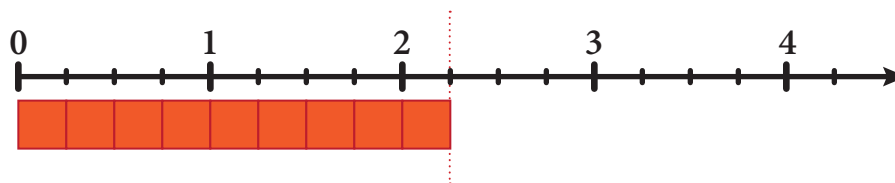


2

Mixed Number

Improper Fraction

$\frac{9}{4}$

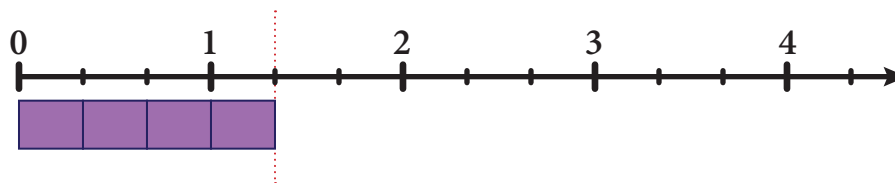


3

Mixed Number

Improper Fraction

$\frac{4}{3}$

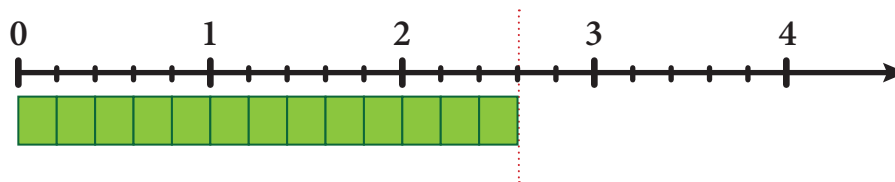


4

Mixed Number

Improper Fraction

$\frac{13}{5}$

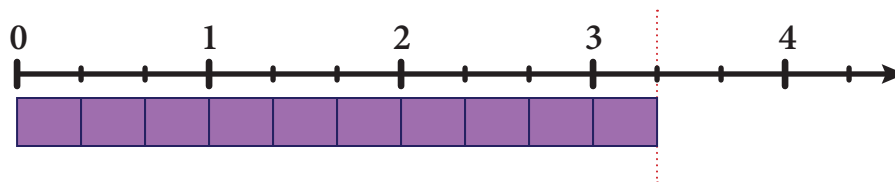


5

Mixed Number

Improper Fraction

$\frac{10}{3}$



6

Mixed Number

Improper Fraction

$\frac{14}{4}$

